

KENDRIYA VIDYALAYA , 9 BRD,AFS,PUNE

QUESTION-BANK

CLASS : IV SUBJECT : ENGLISH READING COMPREHENSION

READ THE PASSAGE CAREFULLY AND ANSWER THE QUESTIONS :

Australia is an island. It is surrounded by the sea. However, as it is large in size, it is called as continent. It has long sandy beaches, grassy farmland and high mountains. It also has vast deserts and forests. Australia is famous for sheep rearing. There are millions of sheep all over the country. These sheep are bred for their meat and wool. There are also many large cattle farms in Australia. Kangaroos live in Australia too. These animals run very fast because they have powerful hind legs. The mother kangaroo carries her young in her pouch. Like kangaroos, koalas can only be found in Australia. These animals are very quiet and they live in gum trees.

1) What is Australia ?

2) Name the island which is a continent also?

3) For what Australia is famous?

4) What Australians get from sheep?

5) Name the two animals that can be found only in Australia.

6) What helps the kangaroo to run fast?

7) Which animal lives most of the time in trees?

8) Which animal carries their young one in their pouch?

9) The Opposite word of 'slow' is _____

10) The plural of 'tree' is _____

READ THE PASSAGE CAREFULLY AND ANSWER THE QUESTIONS :

Pusarla Venkata Sindhu (P.V. Sindhu) is a great badminton player. She was born on 5th July 1995 in a Telugu family. She represents India at international level competitions. Her parents, P.V. Ramana and P. Vijaya are Volleyball players. Coming from a sport background, at the age of six, P.V. Sindhu was inspired to take up sports as her career but she chose Badminton as her main game as she was inspired by Pullela Gopichand who had just won the 2001 All England Open Badminton Championship. Pullela Gopichand is her coach. P. V. Sindhu won silver medal in 2016 Summer Olympics. She became the first Indian woman to win an Olympics silver medal. She was honoured with Rajiv Gandhi Khel Ratna award in 2016.

1) Write the full name of P. V. Sindhu.

Ans. - _____

2) When was P. V. Sindhu born?

Ans. - _____

3) Which game did Sindhu choose as her career?

Ans. - _____

4) Which medal did she win in Olympics 2016?

Ans. - _____

5) Which award was Sindhu honoured with in 2016?

Ans. - _____

6) Write past tense of: -

become - _____

Win - _____

7) Circle the describing word in the given sentence.

Pusarla Venkata Sindhu (P.V. Sindhu) is a great badminton player.

8) Name the parents of P.V.Sindhu.

Ans. - _____ **9)**

Write the opposite of:

Lost X _____

Open X _____

10) Who is the coach of P.V.Sindhu?

Ans. - _____

READ THE PASSAGE CAREFULLY AND ANSWER THE QUESTIONS :

Once upon a time an old carpenter bought a very queer piece of wood. As he used his plane on it , he heard a little voice say, 'Stop ! you are tickling me .' The old man was puzzled and

he thought I will make a puppet from it. He set to work , and as the puppet boy took shape , he named him Pinocchio. As soon as he finished making the eyes , the carpenter was amazed to see them move. Before the mouth was made , it began to laugh. Sooner its nose and hands grew up. Than the Pinocchio snatched the wig of the carpenter. Carpenter also prepared his legs and now the carpenter decided to send him to school but there he did nothing but look for fun. He often ran away from the school. “Why don’t you go to school “ asked the carpenter. Pinocchio told him a lie . . . and his nose started growing longer and longer. Each time he was rude to someone or told a lie his nose grew longer. So he decided he will never lie again.

1) What did the old carpenter buy ?

2) What did the old carpenter make from piece of wood?

3) What was the name of puppet?

4)Who snatched the wig of carpenter ?

5) Where did carpenter send Pinocchio ?

6) What happens each time when Pinocchio lies ?

7) What did Pinocchio decide to do ?

8) Which word in the paasage means confused ?

9) The similar meaning word of frequent is _____

10) Write the past form of :

Hear : _____

Begin

WRITING

short answer type questions

1) What is the best time to water the plants ?

2) Which part of the plant should be watered ?

3) When should we not water the plants?

4) What did the boy make with the trunk of the tree?

5) What did the boy make with the branches of the tree?

6) Would the child hit the donkey , if he wouldn't go ?

7) What did the library door say?

8) What did the library books look like ?

9) Where did the children go to buy books?

10) Who gave money to children to buy books ?

11) From where did the naughty boy come?

12) where did the naughty boy go?

13) What did the carpenter make out of the piece of wood?

14) What was the name of puppet?

Long answer type questions

1) How was the stump of the tree useful ?

2) How did the tree help the boy earn money?

3) Why did the child in the poem like looking at the pictures?

4) How many types of books the shopkeeper showed to the children? Name them.

5) Why did the grandfather give the children money ?

6) What did the naughty boy wonder about ?

7) What happens each time Pinocchio lies and what he decided to do ?

8) Why is the play called ' The Giving Tree' ?

9) Why did the naught boy run away to Scotland ?

GRAMMAR

1) Underline the describing words in the sentences:

- i. The donkey was in bad mood that day.
- ii. The Jack bought a red car.
- iii. Skinny books were kept in library.
- iv. Pictures told stories what a wonderful book.

v. There was a naughty boy.

vi. Rita's irritating behaviour annoyed me.

2) Choose the correct word from the bracket.

i. Do you _____ a secret? (no / know)

ii. This sum is _____. (right / write)

iii. Should we go _____ ? (later / letter)

iv. We should not water in the evening _____.(our / Hour)

3) Arrange the following words in order in which you will find them in dictionary :

Knowledge Chamber Accepted Rejected Library Company

4) Rewrite the sentence using capital letters, full stop , commas and question marks etc.

i) the tailor went to the market

ii) i will go to school on monday

iii) deesha where are you looking

iv) aashita aanya manasvi arya are friends

5) Write the past form of given words :

Come _____ Play _____

Climb _____ sleep _____

Pluck _____ Carry _____

Speak _____ Ask _____

Say _____ Open _____

Tell _____ Decide _____

6) Add 'ly' to make new words.

Fierce _____ Gentle _____

Slow _____ Happy _____

Mad _____ New _____

Specific _____ Angry _____

7) Fill in the blanks with the correct words.

i) Ram was a farmer. _____ (He/His) wanted to sell all _____ (he/his) animals to a rich man. So _____ went to the market. (his/ he) There thieves stopped _____. (he / him) " Stop give us all _____ money. (your/ you're)

ii) Vaidehi is very hard working girl. _____ always does her work on time. (he / she) _____ best friend is Deesha. (her / his) _____ always stay together. (we / they)

9) Choose the correct word.

i. My mother went to the market and bought a dozen _____. (banana/bananas)

ii. My sister asked for an _____. (apple/apples)

iii. My friend has many _____. (pencil/ pencils)

iv. An elephant has one _____. (Trunk / trunks)

v. My father bought a dozen _____. (strawberry / strawberries)

vi. A tree has many _____. (leaf / leaves)

vii. I ate an _____. (icecream / icecreams)

10) Fill in the blanks with *a* or *an*.

i. I want to buy _____ pencil.

ii. I want _____ orange.

iii. I need _____ pillow.

iv. She gifted me _____ alarmclock.

v. Nassrudin aimed _____ arrow.

vi. _____ bat and _____ ball is required to play cricket.

3) Write in five sentences what do we get from plants and trees?

4) Draw any five electronic devices , name them and write their uses :

Q _ _ _ R (strange)

G _ L _ R _ (In great numbers)

B _ _ T S (A type of footwear)

D _ L _ C _ O _ S (Pleasant to taste)

P L _ C _ (To quickly remove)

S T _ _ P (bottom part of tree)

W _ L L _ P (To hit)

W _ _ D _ R _ _ L (extremely good)

N _ _ G _ _ Y (disobedient)

3) Make a word family with – ell for the following word:

W _ _ _ _ T _ _ _ _ Sh _ _ _ _ **4) Make a word family with –**

ail for the following word: T _ _ _ M _ _ _ R _ _ _

5) Encircle the correct spelling:

Beavers Bevers Bivers

Wrestler Restler Wresler

Irrated Irriated Irritated

Deliciucs Dilicious Delicious

Skinny Skiny Skine

Shelif Shelf Shelef

Machines Mechines Mechaines

Gelore Gelorey Galore

6) Complete the sentences by writing appropriate word :

A _____ is a place where sick people are taken care .

An _____ is a place where aeroplanes take off and land.

A _____ is a place where food is cooked.

A _____ is a place where you can buy things.

A _____ is a place where children can study.

A _____ is a place where children can play.

A _____ is a place where you can sit quietly and read many books .

7) Find out the word.

A person who catches thieves. _____

A person who sells vegetables. _____

A person who sells ice cream . _____

A person who flies aircraft. _____

A person who play music. _____

A person who sings song _____

8) Write the nationality of following country.

India- I _____ N

Scotland S _____ I _____

Australia A _____ R _____ L _____

France F _____ H

Japan J _____ P _____ E

Sri Lanka S _____ L _____ N _____ N

China C _____ N _____ S _____

9) What word signs do you see or hear at these places :

At home _____

At vegetable shop

At library

_____ At a Restaurant
_____ At a toy shop
_____ At bus stop
_____ At railway station

10) Write name of any five books :

11) Write any five things you can do to help your grandparents or any old person :

KENDRIYA VIDYALAYA, 9 BRD ,AFS , PUNE

CLASS- IV SUBJECT: MATHEMATICS Name: _____

_____ Roll Number: _____

Sec. ____ **8. CARTS AND WHEELS**

Q1] A. Fill in the blanks by choosing the correct answer.

- 1) A curve which begins and ends at the same point is called a _____.
(cube, circle) 2) A _____ has no sides and no vertices. (triangle, circle)
3) A diameter of the circle passes through the _____ of the circle. (side, centre)
4) A radius of the circle is _____ of the diameter. (half, double)
5) A diameter of a circle is _____ times of its radius. (2, 3)

B) Complete the table:

Radius	4 cm	5cm	_____ cm	11 cm	_____ cm
Diameter	8 cm	_____ cm	15 cm	_____ cm	32 cm

C) In the figure of a circle given, identify: R 1) a radius-_____ A

12.5 cm _____ cm

2) a diameter-_____ P 3) a chord-_____

4) the centre-_____ B

S D) Solve:

1) A circle has a radius of 8 cm. How long is its diameter?

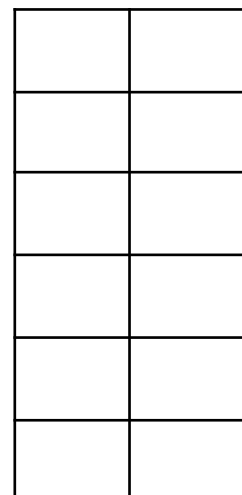
ANS: _____

2) A circle has a diameter of 100 cm. How long is its radius?

ANS: _____

9. HALVES AND QUARTERS

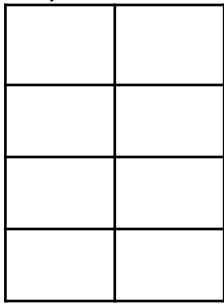
Q1) Write the fraction for the shaded part of each shape.



_____ Q2) Write the fraction for the

unshaded part of each shape.

Q3) Colour that part of the shape which is written below.



$\frac{5}{8}, \frac{1}{2}, \frac{3}{4}, \frac{1}{4}$

Q4) Fill in the blanks.

1) $\frac{1}{2}$ m = _____ cm. 4) $\frac{1}{2}$ litre = _____ milliliters. 2) $\frac{3}{4}$ m = _____ cm.

5) $\frac{3}{4}$ litre = _____ milliliters. 3) $\frac{1}{2}$ kg = _____ g. 6) $\frac{1}{4}$ km = _____

metres. Q5) Solve:

1) There are 80 mangoes. $\frac{1}{4}$ of them are ripe. How many mangoes are ripe?

Solution: _____

2) There are 120 children. $\frac{1}{2}$ of them are boys. How many children are girls?

Solution: _____

3) There are 100 stars. $\frac{3}{4}$ of them are red. How many stars are red. How many are not red?

Solution: _____

10. Play with Patterns

Q1) Complete the pattern.

a) , , , , , , , , , , _____ , _____ , _____ . b) 2, 4, 6, 8, 10, _____ , _____ , _____ .

c) 1, 3, 5, 7, 9, 11, _____ , _____ , _____ .

d) 100, 90, 80, 70, 60, _____ , _____ , _____ .

e) 5Z, 10Y, 15X, 20W, _____ , _____ , _____ .

Q2) Write the numbers from 31 to 39. The sum of each side add up to 105.

Q3) Write the numbers from 45 to 50. Numbers on each side of the triangle add up to 141.

Q4) Identify the secret message.

1] 13 5 12 12 3 15 13 5 20 15 15 10 8 1 18 ANS: _____

_____ .

2] 14 15 3 8 9 12 4 9 19 12 5 6 20 2 5 8 9 14 4 ANS: _____

_____ . **11. Tables and Shares**

Q1) Fill in the blanks.

_____.

12. How Heavy? How Light?

Q1) Fill in the blanks.

a) The standard unit of weight is _____. (kilogram, gram)

b) The smaller unit of weight is _____. (gram, milligram)

c) 5 kilogram = _____ gram (5000, 1000)

d) 3500 gram = ___ kg _____ g. (35 00, 3 500)

e) $250\text{g} + 750\text{g} + 500\text{g} =$ _____ g. (1000, 1500)

Q2) A. Convert into grams.

1) 7kg100g 2) 11 kg 3) 5kg 50g 4) 35kg 650g

Q2) B. Convert into kilograms and grams.

1) 3400 g 2) 28 500 g 3) 6520g 4) 9650g

Q3) 1. Add.

1) kg g 2) kg g 3) kg g 15 250 33 000 87 050 + 8 400 + 54 750 + 29 325

2. Subtract.

1) kg g 2) kg g 3) kg g 39 850 55 000 105 200 – 25 600 – 37 850 – 75 635

Q4) Complete the bill.

ITEM	PRICE PER Kg	QUANTITY	AMOUNT Rs. P
1) Mango	Rs. 300	3kg 500g	
2) Apple	Rs. 140	2 kg 250g	
3) Grapes	Rs. 80	1 kg 750g	
4) Guava	Rs. 60	500g	
5) Pomgranitte	Rs. 75	2 kg 500g	

Q5) Solve.

1) At a railway station, a coolie carried a suitcase weighing 36 kg 800g and a bag weighing 13kg200g. Find the total weight carried by the coolie?

Solution: _____

_____.

2) On Diwali festival Meena bought 15 kg 500g of sweets. She distributed 9 kg350g of sweet among her friends. How much sweets were left with her?

Solution: _____

_____ 10cm

(c) 15cm 15cm _____

15 cm _____ 20cm

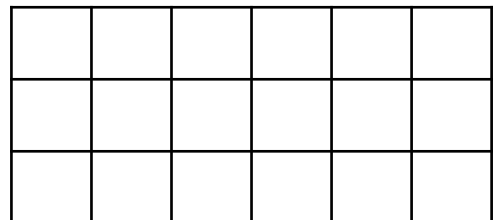
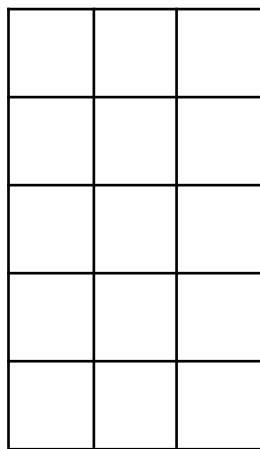
(d)

12cm 12cm _____

_____ 12cm 12 cm

_____ 12cm

Q2) How many squares are there? (a) (b)



_____ squares _____ squares (c) (d)

_____ squares _____ squares Q3) Work out the missing length.

(a) Boundary = 100 cm (b) Boundary = 65 cm ?

15cm 15cm 20cm 20cm 35 cm ? (c) Boundary = 220 m ?

?

50m 50m 60m

Q4) Solve

(a) The length of a rectangular field is 150 m and breadth is 100 m.
Find the boundary of the field? 150 m

100 m

Solution: _____

<i>GOOD-DAY</i>	
<i>OREO</i>	
<i>HIDE&SEEK</i>	
<i>KRACK JACK</i>	

ONE = 2 STUDENTS

1) The favourite biscuit is _____

2) Which TWO biscuits are equally liked by the students?

_____ 3) The least favourite biscuit is

4) Total number of students who like *PARLE-G* and *KRACK JACK*

_____ 5) Total number of students in a class = _____

Q2) Raju made a *chapati chart* after asking his friends. Study the *chapati chart* and answer the questions

Those who like APPLE

Those who like Mango

Those who like Orange

1) How many children like to eat Mango?

a) half b) one-fourth c) three-fourth 2) How many children like to eat

Orange?

a) three-fourth b) half c) one-fourth 3) How many children like to eat

Mango and Apple?

a) one-fourth b) three-fourth c) half Q3) The following graph shows

the favourite games among the children. 60

Number of 50

Children 40

30

20

10

0

Games FOOTBALL CRICKET TENNIS HOCKEY Study the bar graph and answer the following questions.

- 1) Which is the most favourite game? _____
- 2) Which is the least favourite game? _____
- 3) How many children like HOCKEY? _____
- 4) How many less children like TENNIS to CRICKET? _____
- 5) What is the total number of children on whom the survey was conducted?

Question Bank TERM- 2nd

SUBJECT- EVS

CLASS-IV

Syllabus covered- October to February

Chapter-14 BASAVA'S FARM

Fill in the blanks:

1. The onion crops are sown in the month of _____.
2. An Implement called _____ is used to loosen the soil.

3. Onions are ready to be taken out when the leaves _____.
4. The unwanted plants which grow along with the crop are called _____.
5. While sowing it is very important to sprinkle _____ of seeds.
6. The onion seeds start to _____ after _____ days from sowing.

Give reasons for the following:

1. The soil is dug before sowing seeds.

2. Appa not let Basva sprinkle the onion seeds.

3. We must remove the weeds.

4. Onions should be taken out at the right time.

5. Basva is not able to attend school for some days.

Answer the following.

1. How does the farmer know when to harvest the onion crop?

2. What should be taken care while sowing the seeds?

3. Write the steps involved in growing the crops:

Ans: The steps involved in growing the crops is as follows:

1. Ploughing-

_____ 2. Sowing-
_____ 3.

Watering/Irrigation- _____

4. Weeding - _____

5. Harvesting- _____

4. Write the sequence what Basva's Father did for cultivation of onion crop.

Ans. _____

—

Activity

1. Plant a seed in a small plant. Observe the growth and record the observation as when the sprout came, is there a weed growing etc.

Chapter-15 FROM MARKET TO HOME

Give Examples for the Following:

1. Fruits and vegetables that spoil quickly: _____ 2. Fruits

and vegetables that can stay for some days: _____ 3.

Vegetables and fruits that are Smooth to touch: _____

4. Vegetables and fruits that are rough to touch: _____

5. Light vegetables: _____ 6. Heavy Vegetables:

_____ 7. Vegetables which have seeds:

_____ 8. Vegetables which do not have seeds in them:

Answer the following:

1. How do you get to know if a fruit or vegetable is spoilt?

Ans: _____

—

2. Why does the vegetable seller keep sprinkling water on the vegetables?

Ans: _____

–

3 While sorting the vegetables what type of vegetables are kept aside by the seller?

Ans: _____

–

– Activity:

1. Draw your Favourite Fruit or Vegetable. Write about it.
2. Make a price list of different fruits and vegetables.

Chapter-16 A BUSY MONTH

How do they nest?

Write how the following birds build their nest and with what things? 1. Indian Robin-

–

2. Crow-

–

3. Dove –

–

4. Sparrow-

–

5. Pigeon-

–

6. Barber or Coppersmith-

_ 7. Tailor bird-

_ 8. Sunbird-

Answer the following questions:

Q1. Why do birds make nests?

_ Q2. When do the birds leave their nest?

Q3. What different materials do the birds use to make the nest?

_ Q4. Why do squirrels have to keep gnawing on things?

_ Complete the following table

SNO.	Name of the animal	Nature of Teeth	Purpose
1	Cow		
2	Cat		

3	Snakes		
4	Squirrel		

ACTIVITY

Make different types nest of birds on A4 sheets.

CHAPTER-17 NANDITA IN MUMBAI

Answer the following questions

Q1. Why did Nandita and her mother come to Mumbai from the village?

—

Q2. What is the difference between Nandita’s Village house and her Mama’s house in Mumbai?

Ans

S.No.	Her Mama’s house in Mumbai	Nandita’s House in Village
1		
2		
3		
4		

Give Reasons

A) I caught hold of mother’s hand at station because _____

B) The toilet at the end of the street is dirty and smells bad because

C) It took Mami a lot of time to clean Babloo’s house because _____

D) Nandita went and closed the tap at Babloo’s house

because _____

Activity

Draw about the different types of houses mentioned in the lesson.

CHAPTER-18 TOO MUCH WATER, TOO LITTLE WATER

Give reasons for the following:

a) Use a ladle to take out the water from a container.

_ b) A person suffering from vomiting and diarrhoea should be given ORS

_ c) Tap water should be boiled before drinking.

_ Answer the following questions:

Q1. How do you prepare ORS?

Q2. Write any four ways to get clean water.

Ans: _____

Q3. What should be do when the person is affected by
Diarrhoea and vomiting?

Ans _____

—

—

—

Q4. What can be do to keep the toilets clean?

Ans _____

_ Q5. What is water conservation?

Ans _____

—

Q6. What is Rainwater harvesting?

Ans. _____

—

Activity:

Make drawings on the following topics

1. Different ways of cleaning water. (Any 3)
2. Rainwater Harvesting
3. Water conservation

CHAPTER- 19 ABDUL IN THE GARDEN

Answer the following questions:

Q1. Write the functions of the root.

Ans: _____

—

Q2. What are the three things needed for the seed to grow?

Ans _____

—

Q3. What is germination?

Ans: _____

—

Q4. What kind of roots Banyan tree has? What is the function of that root?

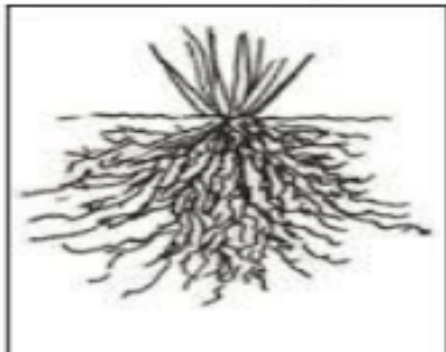
Ans. _____

—

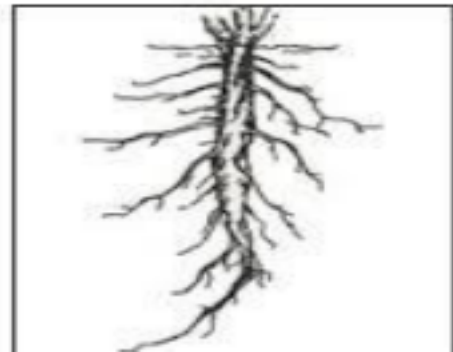
Q5. Define, give for the following:

1. Tap

Fibrous root system



Tap root



Draw and example

Root: _____

2. Fibrous Root:

Q6. Write about Desert Oak.

–

_ Q7. What is photosynthesis?

–

_ Give reasons:

1. It was difficult to pull out the small grass plant.

–

_ 2. People cannot cut the trees grown on the road-side when they want.

–

_ 3. One broken part of the pea plant dried up.

–

_ Fill in the blanks:

a) _____ and _____ are examples of plants with fibrous roots. b)

_____ and _____ are the examples of trees with Tap root. c)

_____ and _____ are examples of roots that store food. d)

A _____ tree has roots hanging down from the branches. e)

_____ tree is found in Australia.

Differentiate between Tap root and Fibrous root.

SNo	Tap Root	Fibrous Root
1		
2		
3		

Activity

Using wool or thread , make a tap root and fibrous root.

CHAPTER-20 EATING TOGETHER

Answer the following questions:

1.Where and when is Bihu celebrated?

Ans: _____
—

2.What is Bhela ghar?

Ans: _____
—

3. What is Bora Rice?

Ans: _____
—

4. How is Cheva Rice prepared?

Ans: _____
—

5. What is mid-day meal?

Ans: _____
—

6.Write about Bihu festival.

Ans: _____
—

Match the following:

Column A Column B

1 Bhela Ghar first day of Bihu

2 Bora a special rice cooked by covering with Banana Leaf

3 Meghla Chador thatched hut burnt to pay homage to sun God
4 Uruka every child's right

5 Cheva Rice a temporary shed made with bamboo

6 Pitha a common variety of rice in Assam (It is sticky rice)

7 Mid-day meal a special dress worn by the woman of Assam

8 Tao a dish served with tea

9 Mezi a big vessel

Fill in the blanks:

a) Bora is a common variety of sticky _____ consumed in Assam. b)

Women in Assam were dressed up in _____ and _____

c) During Bihu feast, food is served on _____ leaves.

d) _____ is given in some schools of our country by the order of High Court.

e) Children should get _____, hot and properly _____

food. Activity:

Draw any vessel which is used in your house to cook for more people. Mark Assam in the map of India.

CHAPTER- 21 FOOD AND FUN

Answer the following questions

1. What do you understand by community eating?

Ans: _____

—

2. What is Langar?

Ans _____

—

.

3.What happens in Gurudwara after Ardaas is over?

Ans _____
—

—

—

4.What message do we get when we see people eating together in a langar?

Ans: _____
—

Fill in the Blanks:

- a) _____prasad is a kind of Halwa.
- b) After _____, _____ is distributed.
- c) In langar rotis are baked on _____.
- d) Food in the Gurudwara kitchen is cooked in _____vessels. e) People sat down in _____to have langar.

Activity:

Draw few vessels used cooking in large scale.

CHAPTER-22 THE WORLD IN MY HOME

Answer the following:

1.What could be done while taking any decision in the family?

Ans: _____
—

2. What you should do if you feel uncomfortable with somebody touch?

Ans _____

CHAPTER-23 POCHAMPALLI

Fill in the blanks:

- a) A _____ has many needles that vary in size and numbers. b)
_____ village is near _____ town in _____
- c) _____ sarees are bright in _____ and are world famous. d)
Most of the _____ arts are learnt at home.
- e) _____ are used to weave cotton cloth and silk threads are used to weave silk.

Give reasons:

- a) Mother puts the threads in boiling water.

- _ b) Many weavers are giving up their family craft.
or
The craft is in danger.

- c) The loom has many needles.

–

Answer the following questions.

1) How did “Pochampalli” sarees get their name?

Ans: _____

–

2) Differentiate between traditional and professional occupation.

TRADITIONAL	PROFESSIONAL

3) Write the steps involved in making the cloth from thread.

Ans: _____

–

Activity:

Mark Andhra Pradesh in the map of India.

Mukhtapur is famous for its Pochampalli. Find out what makes the following places famous. Also paste the picture of the art form.

- a) Thanjavur
- b) Jammu and Kashmir.
- c) Assam
- d) Bihar
- e) Gujarat

CHAPTER-24 HOME AND ABROAD

Give one word for the following:

- a) The place where only sand is seen for miles and there is no water- _____
- b) Mountains made of sand-. _____
- c) Money used in Abu Dhabi- _____
- d) Local Language spoken in Abu Dhabi- _____
- e) Common fruit eaten in Abu Dhabi- _____

Answer the following:

1) What are sand dunes?

Ans: _____
—

2) Why is petrol cheaper than water in Abu Dhabi?

Ans: _____
—

3) Why people in Abu Dhabi wear loose cotton clothes and keep themselves fully covered?

Ans: _____
—

Write in detail about Abu Dhabi on the following aspects:

- 1. Climate and weather- _____
- 2. Land form

—

3. Trees and plants- _____

—

—

4. Currency- _____.

5. Clothes-

—

—

—

6. Buildings -

—

—

Observe the currency note of India and write what all information you see in that.

Observations:



_____.



_____.



_____.



_____.



_____.



CHAPTER-25 SPICY RIDDLES

Answer the following questions:

1. What are spices?

Ans: _____

—

2. Why are spices added to food?

Ans _____

—

3. Which state in India is famous for spices?

Ans: _____

4.

What is Garam Masala?

Ans: _____

—

5. Name few spices.

Ans: _____

—

Activity

Make an art with spices.

Make a chart of different spices.

Mark Kerala in the map of India.

CHAPTER-26 DEFENCE OFFICER WAHIDA

Answer the following questions:

1. Who was Wahida Prism? Write about her achievements.

Ans: _____

—

2. Why did Wahida's father add prism to her name?

Ans: _____

—

3. What are the responsibilities of a naval doctor on ship?

Ans: _____

4. What inspiration do you get from Wahida Prism?

Ans: _____

—

FILL IN THE BLANKS:

1. _____ is a Lieutenant Commander in Indian navy.
2. In a parade, _____ march behind the leader, 36 commands have to be given during the entire parade in a very loud vice.
3. The army, navy and air force are the _____ forces of India.
4. Prism is a kind of glass that reflects seven _____.
5. _____ is given on every naval ship.

Activity

Write the name of the state where Wahida belongs to also mark the same in the map of India.

CHAPTER-27 CHUSKIT GOES TO SCHOOL

Fill in the blanks:

1. _____ are built across the rivers.
2. Be kind and helpful to _____ children.
3. A _____ can be pushed up a ramp easily.
4. A wheel chair can move only on _____ surface.
5. Ladakh is a place in _____.

Answer the following questions:

1. What is a ramp? What is it used for?

Ans _____

—

—

—

2. Do you have a ramp in your school?

Ans: _____

3. Name two places where you have seen the ramp.

Ans _____

4. Where is Skitpo Pul village?

Ans _____

—

—

5. How did Chuskit's friend helped her go to school?

Ans _____

—

—

—

—



Activity:

Make your own bridge.

MISCELLANEOUS QUESTIONS

Q.1 PICTURE BASED QUESTION (1 MARK)


Q1] Observe the given picture and answer the questions given below:



2) Name the crop. _____

3) Name the transport. _____


Write its use. _____




4) What do you see in the given

picture? _____

5) Write the name of fruits that you see in the basket.




6) Name the vegetables.





7) Recognize the beaks and claws shown below and write the names of birds each





8] Observe the nest and write the name of bird that makes it.




----- 9) Name the different types of



rooms and also write its use.




10) What do you see in the given picture?



11) Name the process. _____


Which water is saved during this process? _____



How this water can be used?


12) Observe the given pictures and answer the questions given below:

Label the parts of plants





1) Name the tree. _____

root. _____


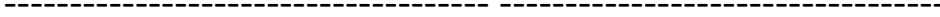




2) Type of

13) Name these festivals celebrated by us.



14) Name these religious places.



----- Q.2

QUESTION OF 1 MARK (VSA)

1. Material used in Bhela Ghar.

2. Who is current Defence Minister of India?

3. Medicinal use of Clove, haldi, Cumin, Saunf etc.

4. A tree which has hanging roots. _____

5. Use of Bird's beak.

_ 6. Use of handloom.

_ 7. Where is Golden temple?

8. Use of – Illige, Khunti, Kurige.

—

—

—

9. Vegetables that runs for month.

_ 10. Vegetables that spoils quickly.

_ 11. Gate way of India is in.....

12. Why Nandita came to Mumbai?

13. Describe about the teeth of Snake.

14. The bird makes its nest between stones..... 15. The bird's nest that hangs from branches of tree.....

16. The state which has Garden of spices.....

17. Spice that is used for healing wounds.....

18. Pochampalli district is in.....

19. Bihu is celebrated in

20. Rajouri district is in.....

21. Belvanika district is in

22. Bhavnagar district is in.....

23. Burj Khalifa is in.....

24. What is the language of Abu Dhabi?.....

25. In India Mid-day meal programme runs by the order of.....

26. Traditional dress of women in Assam.....

27. Holgundi area is in which

state?..... 28. Why weeds should be pulled out?

_ 29. Why previous days vegetables should be sold first?

—

—